

Name: _____

Date: _____

Perimeter and Area

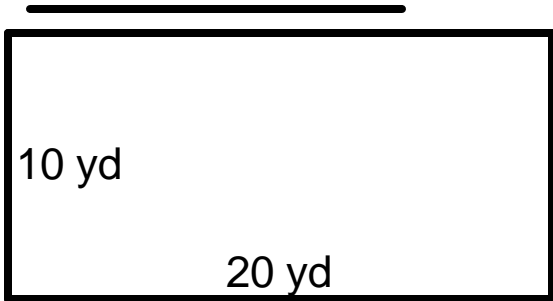
What do you call a happy mushroom? A Fun-Guy!

Using the given measurements, find the area and perimeter of each rectangle.

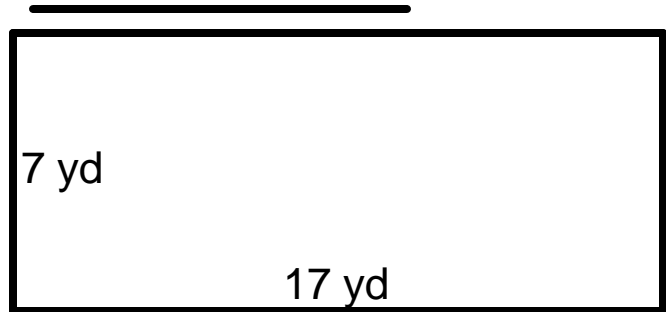


www.atozteacherstuff.com

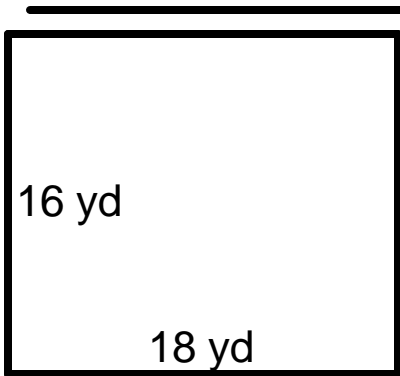
①



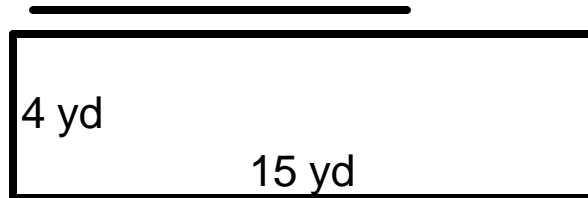
②



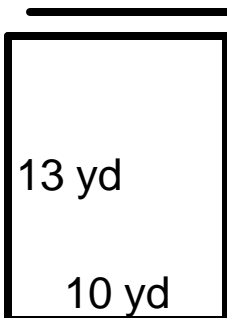
③



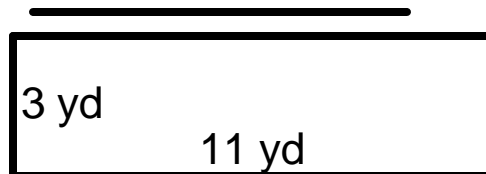
④



⑤



⑥



Name: _____

Date: _____

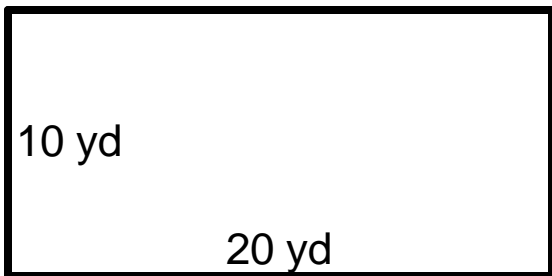
Perimeter and Area

What do you call a happy mushroom? A Fun-Guy!

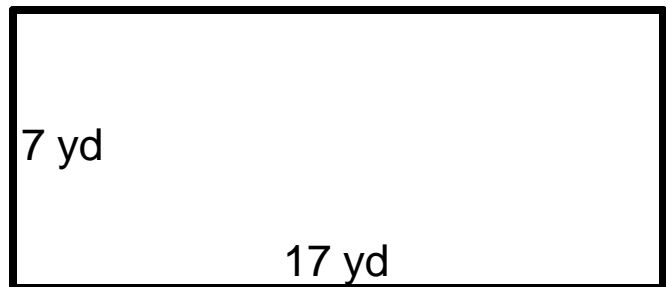
Using the given measurements, find the area and perimeter of each rectangle.



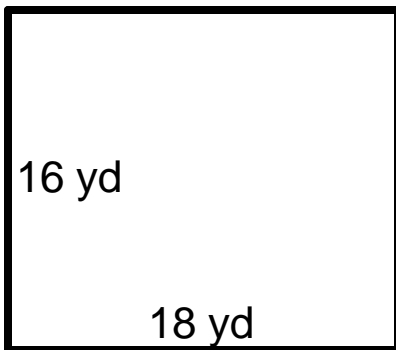
① $P=60\text{yd}$ $A=200\text{yd}^2$



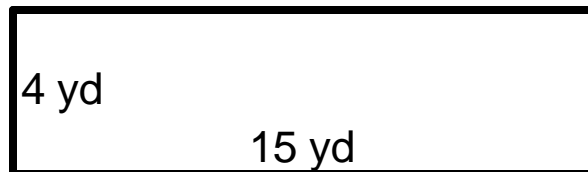
② $P=48\text{yd}$ $A=119\text{yd}^2$



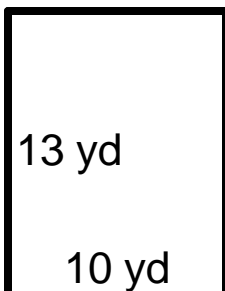
③ $P=68\text{yd}$ $A=288\text{yd}^2$



④ $P=38\text{yd}$ $A=60\text{yd}^2$



⑤ $P=46\text{yd}$ $A=130\text{yd}^2$



⑥ $P=28\text{yd}$ $A=33\text{yd}^2$

