

Name: _____

Date: _____




Measurement: Perimeter

What is a history teacher's favourite fruit? Dates!

Measure the perimeter of each rectangle to the nearest centimeter (cm).



www.atozteacherstuff.com



Name: _____ Date: _____

Measurement: Perimeter

What is a history teacher's favourite fruit? Dates!

Measure the perimeter of each rectangle to the nearest centimeter (cm).

