

Name: _____ Date: _____

Perimeter

How can you tell if there's an elephant in your sandwich? You can't pick it up.

Using the given measurements, find the perimeter of each rectangle.

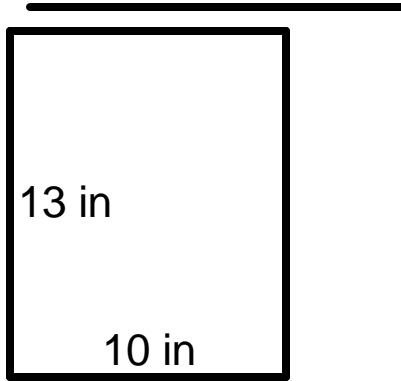


www.atozteacherstuff.com

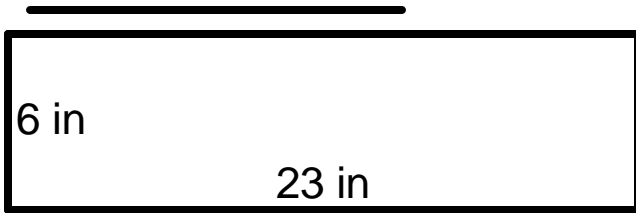
①



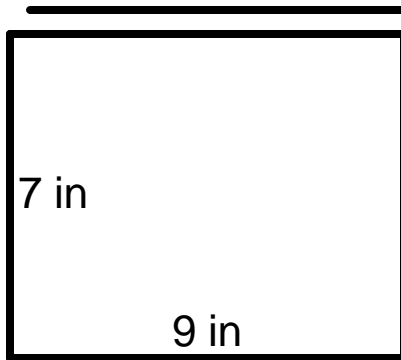
②



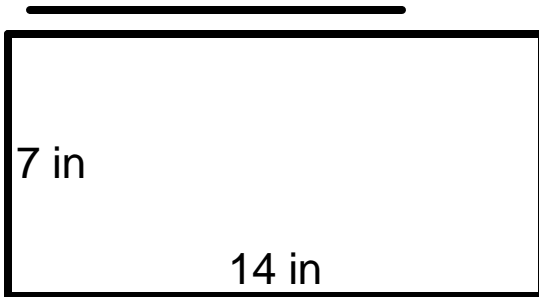
③



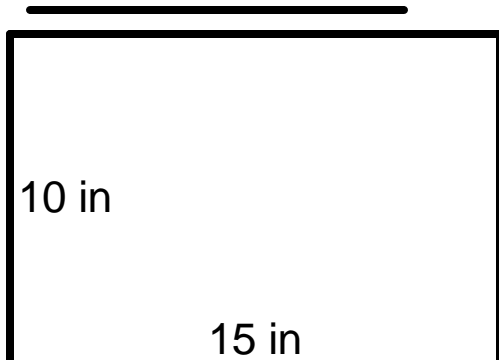
④



⑤



⑥



Name: _____ Date: _____

Perimeter

How can you tell if there's an elephant in your sandwich? You can't pick it up.


Using the given measurements, find the perimeter of each rectangle.



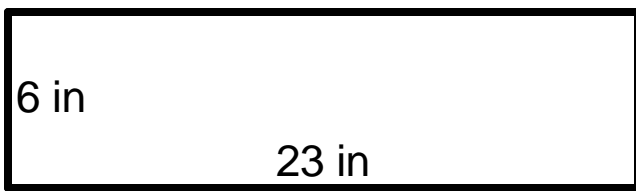
① $P=60in$



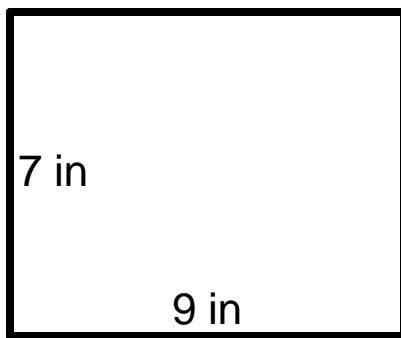
② $P=46in$



③ $P=58in$



④ $P=32in$



⑤ $P=42in$



⑥ $P=50in$

